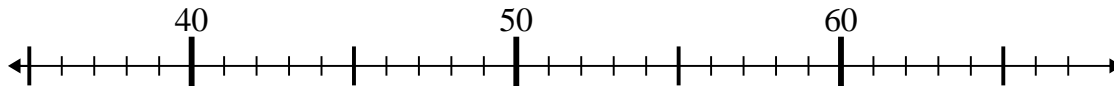




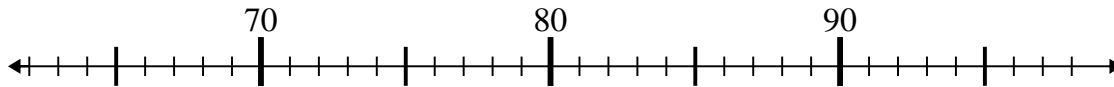
Use the numberlines to solve each problem.

Answers

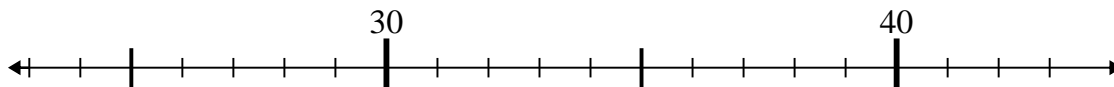
1)  $66 - 21 =$



2)  $74 + 4 =$



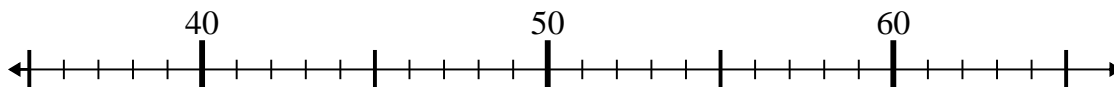
3)  $31 - 1 =$



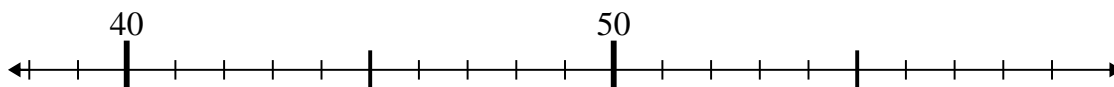
4)  $49 - 8 =$



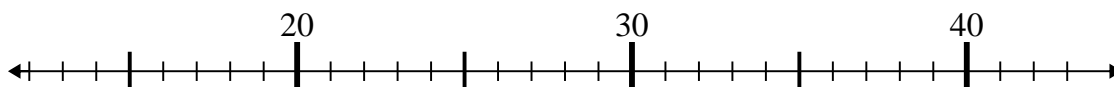
5)  $48 + 15 =$



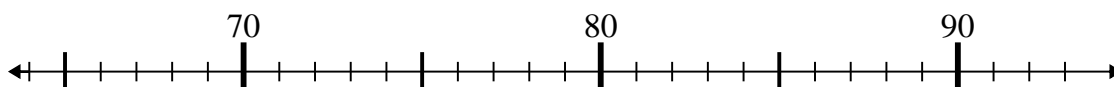
6)  $54 - 5 =$



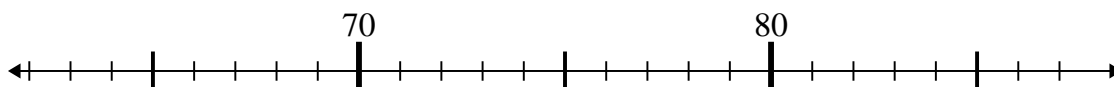
7)  $43 - 26 =$



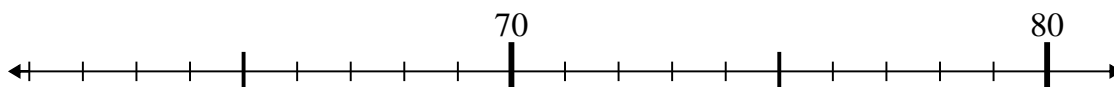
8)  $74 - 10 =$



9)  $64 + 5 =$



10)  $69 + 0 =$



1. \_\_\_\_\_

2. \_\_\_\_\_

3. \_\_\_\_\_

4. \_\_\_\_\_

5. \_\_\_\_\_

6. \_\_\_\_\_

7. \_\_\_\_\_

8. \_\_\_\_\_

9. \_\_\_\_\_

10. \_\_\_\_\_



Use the numberlines to solve each problem.

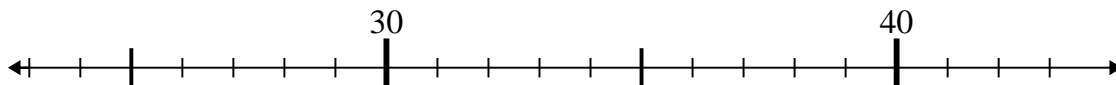
1)  $66 - 21 =$



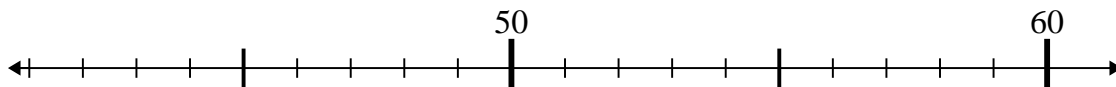
2)  $74 + 4 =$



3)  $31 - 1 =$



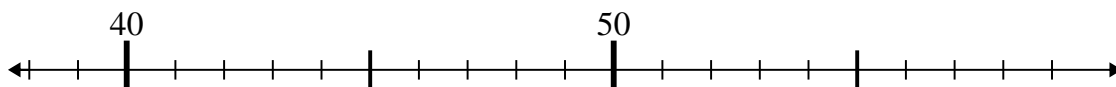
4)  $49 - 8 =$



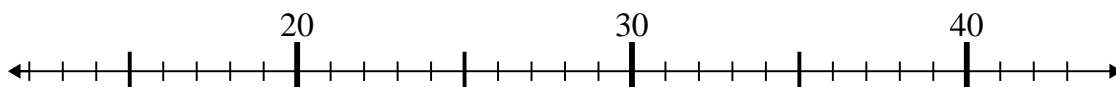
5)  $48 + 15 =$



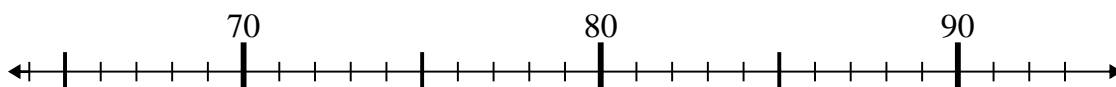
6)  $54 - 5 =$



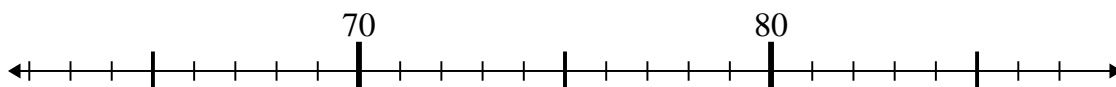
7)  $43 - 26 =$



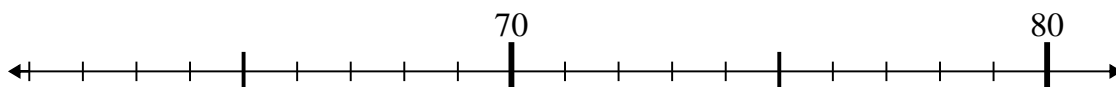
8)  $74 - 10 =$



9)  $64 + 5 =$



10)  $69 + 0 =$

Answers1. 452. 783. 304. 415. 636. 497. 178. 649. 6910. 69